

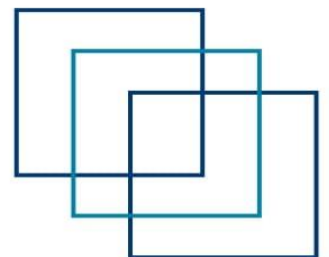


MEO CLASS 2

WRITTEN: EKG

(ENGINEERING KNOWLEDGE GENERAL)


FOR INDIAN COMPETENCY EXAM



www.dmarinestudy.com



www.dmarinestudy.com



JAN-2026

- 1.(a) Explain the Operational principle of a ship's stabiliser
(b) Describe with sketches Active and Passive types of stabilizers.

2026/JAN/01

[Click Here to See the Answer](#)

2. With regards to **boiler water level control**. Explain the following
a) Shrink and swell phenomenon
b) Cascade control
c) Split control (16)
d) Condensing Chamber-Function and location.

2024/JUN/02 **2026/JAN/02**

[Click Here to See the Answer](#)

3. With reference to **Keyless Propeller**:

- a) Sketch a section through a keyless sleeved propeller. (7)
b) State the advantages of using a keyless sleeved propeller
c) State with reason, Which metal sleeve should be made for contact with the forged mild steel tail shaft? (3)
d) State the material uses to bond the sleeve to the propeller and the general thickness of the bonding material. (3)

2023/OCT/09 **2023/DEC/07** **2024/JUN/03** **2026/JAN/03**

[Click Here to See the Answer](#)

4. With reference to **shaft alignment**

- a) Explain the meaning of fair curve or rational alignment. (8)
b) Shaft alignment is often verified using hydraulic jacks to obtain a simple graph. Sketch such a graph, Indicating the following: Static load, (1)
Hysteresis, Influence number: Explain the limitations of checking shaft alignment solely by hydraulic jacking methods. (8)


2022/DEC/08 **2023/AUG/05** **2024/JUN/04** **2024/DEC/07**

2025/SEP/08 **2026/JAN/04**

[Click Here to See the Answer](#)



www.dmarinestudy.com



5. With respect to **Energy efficient running of ships.**

a) Sketch and explain the optimization of propeller hull interface flow devices and Improvement of propulsion efficiency

b) sketch and explain the optimization of Auxiliary machinery using VFDS. (8)

2021/SEP/07

2022/FEB/07

2023/NOV/09

2024/JUN/05

2026/JAN/05

[Click Here to See the Answer](#)

6.a) Examine in detail three common but entirely different reasons for loss of steering gear systems (5)

b) State how failure is inhibited in the design, operation and maintenance of steering gear systems (5)

c) Describe how a vessel may make port upon irreparable failure of the steering telemotor (6)

2024/JUN/06

2025/FEB/08

2026/JAN/06

[Click Here to See the Answer](#)

7a) Draw a block diagram for a fully automated accommodation air conditioning unit, labelling the component parts and indicating the directions of air flow (9)

b) Explain why the unit includes means of dehumidification and humidification

c) A chart is used for ensuring that the accommodation conditions are within the so-called Comfort Zone: what useful information does the chart give?

2022/DEC/04

2024/JUN/07

2025/SEP/04

2026/JAN/07

[Click Here to See the Answer](#)


8. Sketch and describe a **stockless anchor** illustrating the method or device used to attach it to the chain cable. When the anchor and cable are ranged during the ship's underwater survey what parts require special attention and what defects are likely to be discovered (16)

2026/JAN/08

[Click Here to See the Answer](#)



www.dmarinestudy.com



9. Explain how the ingress of sea water is prevented in an **oil lubricated stern bearing system**. Should the system fail, describe the corrective action possible whilst the vessel is afloat. State why two stern bearing oil header tanks are fitted in some instances? (16)

2021/JAN/06

2021/MAR/02

2021/JUL/04

2021/NOV/01

2022/MAR/08

2023/NOV/03

2024/JUN/09

2025/JAN/04

2026/JAN/09

[Click Here to See the Answer](#)

FEB-2026

(a) Sketch and explain a fully automated air conditioning system for accommodation spaces, annotating the relevant temperatures and relative humidity's throughout the system. (12)

(b) Describe how bacteria are prevented from multiplying to a harmful level in an air conditioning system. (4)

[Click Here to See the Answer](#)

2) Sketch and describe a high-pressure cut-out in a refrigeration system. (6)

b) The refrigeration compressor has stopped due to operation of the h. p. cut-out. Explain -

(i) The possible causes. (6)

(ii) How these causes would be found and possible remedies

c) What steps are taken if the compressor "short-cycle" on low pressure cut-out? (4)

2024/FEB/02

2025/JUL/06


2026/FEB/02

[Click Here to See the Answer](#)

3)a. Briefly discuss the principle and the key components and elements of an ICCP system, outlining their functions in safeguarding the integrity of metal structures on ships. (10)



www.dmarinestudy.com



b) Enumerate the advancements in ICCP technology over the years and how these innovations contribute to more efficient and sustainable corrosion protection. (6)

2024/FEB/03 2026/FEB/03

[Click Here to See the Answer](#)

4.a) What different methods are used for preserving ship's hull during service. What type of Antifouling coats are used? (6)

b) State what materials are being banned by international regulation for use in Antifouling coats and the reason for banning. (5)

c) Discuss briefly how does paint coating on deck differ from that on super structure. (5)

2022/JUL/09 2024/FEB/04 2026/FEB/04

[Click Here to See the Answer](#)

5. An engine room is operating in the unmanned (UMS) mode. In the event of a failure of the UMS systems explain the arrangements a second engineer officer should introduce to operate the machinery in manual mode for a passage of 10 days duration.

2022/SEP/02 2022/NOV/01 2024/JUL/02 2024/SEP/09

2025/MAR/01 2025/JUN/02 2025/NOV/02 2025/DEC/02

2026/FEB/05

[Click Here to See the Answer](#)

6. Define creep and specify the conditions under which it occurs? (6)

b) Discuss three metallurgical/processing techniques that are employed to enhance the creep resistance of metal alloys. (10)

2022/SEP/02 2022/NOV/01 2024/JUL/02 2024/SEP/09

2025/MAR/01 2025/JUN/02 2025/NOV/02 2025/DEC/02

2026/FEB/06

[Click Here to See the Answer](#)


7. Explain EACH of the following metallurgical processes:

(a) Induction hardening

(b) Nitriding



www.dmarinestudy.com



(c) Case hardening (4)

[Click Here to See the Answer](#)

8 With reference to Boiler feed regulation:

a) Describe, with the aid of sketches, the operation of a boiler feed water regulator controlled by at least two other parameters besides water level in the drum. (6)

b) Give reasons for the inclusion of the other elements besides water level in controlling feed flow. (5)

c) Deduce the possible effects on the system when the drain valve in the constant leg in the level transmitter starts to leak.(4)

2022/OCT/05 **2024/FEB/08** **2026/FEB/08**

[Click Here to See the Answer](#)

9a) Sketch and describe a Pilgrim Nut for securing a propeller to the screw shaft.

b) Describe how this device is used to loosen the propeller on the shaft when removal or inspection becomes necessary. (5)


c) Give four reasons why this method is considered to be superior to all other methods.

2024/FEB/09 **2026/02/09**

[Click Here to See the Answer](#)



www.dmarinestudy.com



MAR-2026

Q1. With reference to the Fuel standards ISO-8217-2017 discuss the amendments made as compared to its previous edition. Explain the significance of the following: (16)

- (a) Pour point, cloud point and cold filter plugging point.
- (b) Cat fines
- (c) Fatty Acid Methyl Ester
- (d) Dissolved H₂S in fuel.

2021/SEP/Q6 **2022/FEB/Q6** **2022/APR/Q2** **2025/APR/Q1**
2026/MAR/Q1

[Click Here to See the Answer](#)

Q2. With reference to Air conditioning systems onboard for accommodation spaces:

- a) Sketch and explain a fully automated air conditioning system, annotating the relevant temperatures and relative humidity's throughout the system. (12)
- b) Explain how bacteria are prevented from growing in an air conditioning system to a dangerous degree. (4)

2026/FEB/Q1 **2026/MAR/Q2**

[Click Here to See the Answer](#)

Q3. a) Describe the key phases and microstructures present in the iron-carbon equilibrium diagram and explain their significance in the heat treatment of steel. (8)


- b) How do the different regions of the iron-carbon diagram influence the mechanical properties of steel, such as hardness, toughness, and ductility? Provide examples of how specific compositions and heat treatments can achieve desired properties. (8)

2024/AUG/Q1 **2025/APR/Q3** **2026/MAR/Q3**

[Click Here to See the Answer](#)



www.dmarinestudy.com



Q4. a) As per SOLAS regulations, what checks and tests must be carried out on the steering gear system before the ship's departure from port? Explain the procedures involved and the documentation required. (8)

b) Explain the construction, working and purpose of hunting gear in a steering gear system. What are the consequence of its failure? (8)

2025/APR/Q4 **2026/MAR/Q4**

[Click Here to See the Answer](#)

Q5. With reference to fuel oil viscosity: (16)

(a) Explain why correct fuel oil viscosity is necessary

(b) Describe TWO methods for the measurements of viscosity that are suitable for the inclusion into a pneumatic or electronic control system.

(c) State, with reasons, a control action for a viscosity controller.

2021/SEP/Q4 **2021/DEC/Q4** **2022/APR/Q7** **2025/APR/Q5**

2026/MAR/Q5

[Click Here to See the Answer](#)

Q6. Compare and contrast open-loop, closed-loop, and hybrid EGCS. What are the advantages and disadvantages of each system, and in what scenarios is each type preferred? (16)

2026/MAR/Q6

[Click Here to See the Answer](#)

Q7. With reference to a keyless propeller designed for hydraulic (wet) fit and withdrawal:

(a) Describe, with the aid of a sketch, how the propeller is fitted to the tail shaft. (10)

(b) State TWO advantages compared to a dry fit: (3)

(c) Explain how the thrust is transmitted without the use of a key and keyway.


2026/MAR/Q7

[Click Here to See the Answer](#)

Q8. (a) Describe, with the aid of a Strain versus Time diagram, how a creep test is carried out to determine the strain rate of the material under test. (6)



www.dmarinestudy.com



(b) Explain EACH of the stages sketched in the diagram in part. (4)

2026/MAR/Q8

[Click Here to See the Answer](#)

Q9. (a) Explain the action of EACH of the following metallurgical mechanism:

(i) Creep

(ii) Brinelling

(iii) Fretting

(iv) Fretting corrosion. (10)

(b) State, with reasons, where EACH of the mechanisms in occur in ship propulsion system. (6)

2021/APR/Q5

2021/APR/Q7

2021/AUG/Q8

2022/JAN/Q8

2025/APR/Q9

2026/MAR/Q9

[Click Here to See the Answer](#)

APRIL - 2026

Q1. With reference to Ship Stabilizers usually used in passenger ships:

(a) Explain the operation principle of ship's stabilizer. (8)

(b) Describe with sketches Active and Passive types of stabilizers. (8)

2025/NOV/Q8

2026/JAN/Q1

2026/APR/Q1

[Click Here to See the Answer](#)

Q2. With regards to boiler water level control. Explain the following

A. Shrink and swell phenomenon.

B. Cascade control.

C. Split control.

D. Condensing chamber – Function and location.

2024/JUN/Q2

2026/JAN/Q2

2026/APR/Q2


[Click Here to See the Answer](#)

Q3.a) Describe the key phases and microstructures in the iron-carbon equilibrium diagram and explain their significance in the heat treatment of steel. (8)

(b) How do the different regions of the iron-carbon diagram influence the mechanical properties of steel, such as hardness, toughness, and ductility?



www.dmarinestudy.com



Provide examples of how specific compositions and heat treatments can achieve desired properties. (8)

2024/AUG/Q1 2025/APR/Q3 2026/MAR/Q3 2026/APR/Q3

[Click Here to See the Answer](#)

Q4. With reference to shaft alignment:

- (a) Explain the meaning of fair curve or rational alignment (6)
- (b) Shaft alignment is often verified using hydraulic jacks to obtain a simple graph. Sketch such a graph, indicating the following:
 - (i) Static load
 - (ii) Hysteresis
 - (iii) Influence number (6)
- (c) Explain the limitations of checking shaft alignment solely by hydraulic jacking methods. (4)

2022/DEC/Q8 2023/AUG/Q5 2024/JUN/Q4 2024/DEC/Q7
2025/SEP/Q8 2026/JAN/Q4 2026/APR/Q4

[Click Here to See the Answer](#)

Q5. With respect to Energy efficient running of ships.

- (a) Sketch and explain the optimization of propeller hull interface flow devices and improvement of propulsion efficiency. (8)
- (b) Sketch and explain the optimization of Auxiliary machinery using VFDs.

2021/JUL/Q9 2021/SEP/Q7 2022/FEB/Q7 2023/NOV/Q9
2024/JUN/Q5 2026/JAN/Q5 2026/APR/Q5

[Click Here to See the Answer](#)

Q6.a) Examine in detail three common but entirely different reasons for loss of steering gear systems. (5)


- (b) State how failure is inhibited in the design, operation and maintenance of steering gear systems. (5)
- (c) Describe how a vessel may make port upon irreparable failure of the steering telemotor. (6)

2024/JUN/Q6 2025/FEB/Q8 2025/OCT/Q8 2026/JAN/Q6
2026/APR/Q6

[Click Here to See the Answer](#)



www.dmarinestudy.com



Q7. A. Draw a block diagram for a fully automated accommodation air conditioning unit, labelling the component parts and indicating the directions of air flow. (8)

B. Explain why the unit includes means of dehumidification and humidification. (4)

C. A chart is used for ensuring that the accommodation conditions are within the so-called Comfort Zone: what useful information does the chart give? (4)

2022/DEC/Q4 **2024/JUN/Q7** **2025/SEP/Q4** **2026/JAN/Q7**

2026/APR/Q7

[Click Here to See the Answer](#)

Q8. With reference to plate heat exchangers, explain how EACH of the following design aspects promote heat transfer.

(a) Material selection. (6)

(b) Flow pattern. (6)

(c) Extended surface area. (4)

2026/APR/Q8

[Click Here to See the Answer](#)

Q9. Explain how the ingress of sea water is prevented in an oil lubricated stern bearing system. Should the system fail, describe the corrective action possible whilst the vessel is afloat. State why two stern bearing oil header tanks are fitted in some instances? (16)

2021/JAN/Q6 **2021/MAR/Q2** **2021/APR/Q3** **2021/JUL/Q4**

2021/NOV/Q1 **2022/MAR/Q8** **2023/NOV/Q3** **2024/JUN/Q9**

2025/JAN/Q4 **2026/JAN/Q9** **2026/APR/Q9**

[Click Here to See the Answer](#)